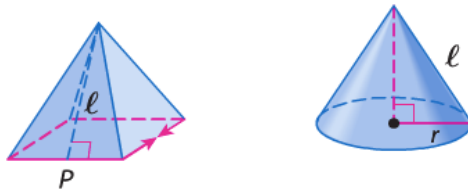
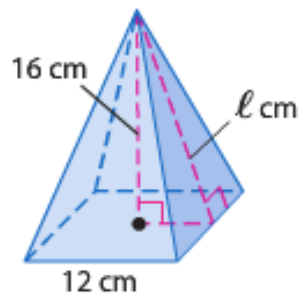


12-3/12-5**Lateral Area, Surface Area and
Volume of a Pyramid and Cone****Lateral Area of
Pyramids and Cones**

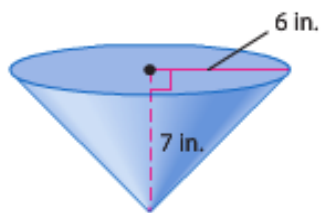
$$LA = (1/2)Pl$$

l = slant height (in a pyramid,
distance from midpoint of any
side to top of pyramid)

Find the Lateral Area



Find the Lateral Area

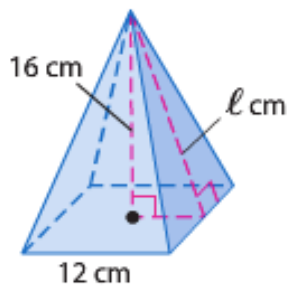


Surface Area and Volume of Pyramids and Cones

$$SA = (1/2)PI + B$$

$$V = (1/3)BH$$

Find the Surface Area and Volume



Find the Surface Area and Volume

